

WORKSHEETNO-1


Name of the Chapter : TIME GOES ON

Q.1 Complete the paragraph using the words in the box:

evening, morning, minutes, seconds, hours, afternoon, days, rises

Annada gets up at 7 o'clock when the sun _____. She wishes good _____ to everyone in the house. Then she takes a bath for 10-15 _____ and gets ready for school. Then she has her breakfast and goes to school. She spends 5 _____ there. She gets home in the _____. Her _____ a week. This is Annada's daily routine.

Q.2 Angithraj has mixed some of the sequences of happening for each part.Help him by writing the correct sequence:



Q.3 How long does it take to do the following action. Write by using the words below:

seconds, minutes, hours, days, month, years


(a) Learning dance



(b) Ironing clothes



(c) Growth of plant



(d) Breathing



(e) Cooking




(f) Cleaning a 2-floorhouse





(g) bathing

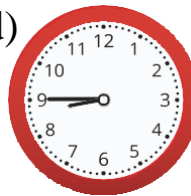


Tell the time:

(a)  :


(b)  :


(c)  :

(d)  :

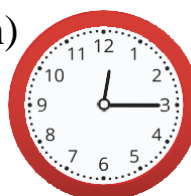
(e)  :




(f)  :


(g)  :




(h)  :

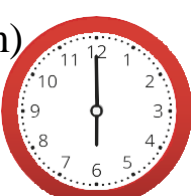
(i)  :




(j)  :

(k)  :


(l)  :

(m)  :

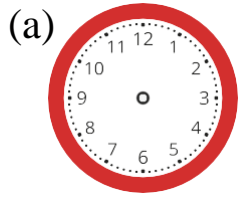


(n)  :

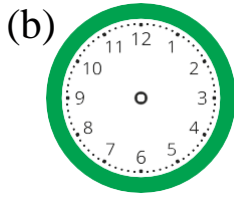
(o)  :

(p)  :

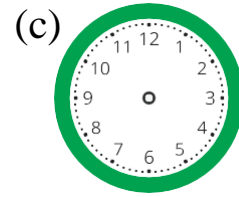
Q.4. Draw the hands of the clock:



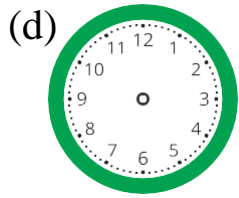
12:35



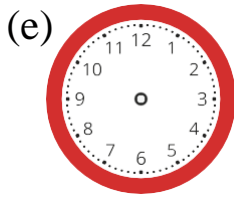
1:20



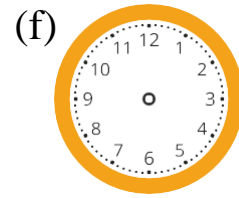
2:45



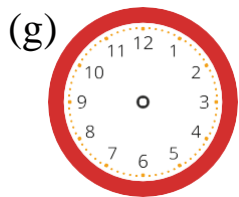
2:50



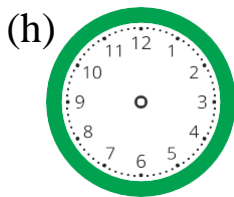
4:30



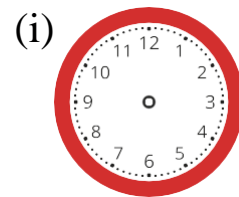
3:15



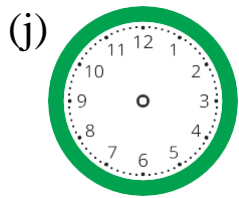
3:00



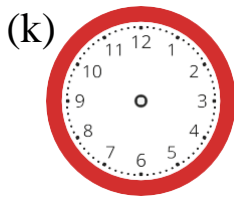
12:50



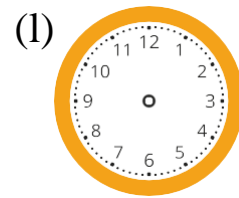
6:10



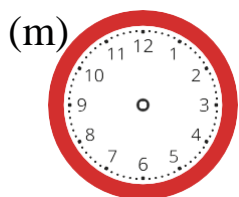
3:35



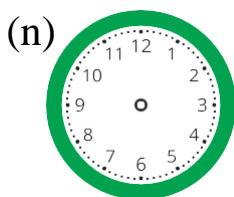
4:55



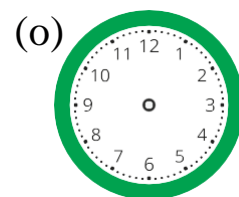
1:50



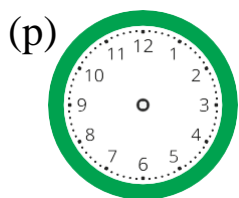
12:05



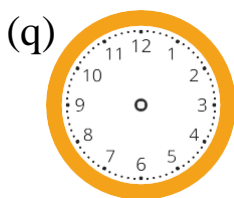
7:55



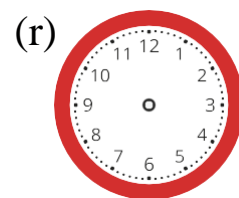
3:40



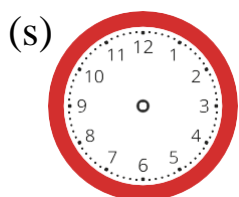
3:50



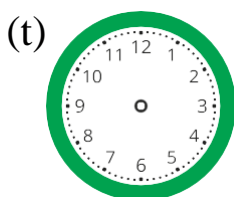
5:35



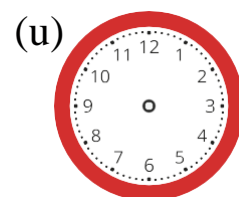
6:25



2:10



12:00



5:50

WORKSHEETNO-2

Name of the Chapter : TIME GOES ON

I. Choose the correct answer:

a) 3 days after Sunday

i) Friday ii) Saturday iii) Thursday

b) 2 hours before 12 o' clock at noon

i)6.30 in the evening ii)10' clock in the morning iii)2 o' clock in theafternoon

c) Growing a tree will take

i)days ii)seconds iii)years

d) To reach Delhi from Madurai it will take


i) seconds ii)minutes iii)days

e) This year is 2016. Next year will

bei) 2015 ii) 2019

iii)2017

II.The following pictures shows the various stages in the life of Krishna'sgrandmother .Write these stages in the correct order as they happened.














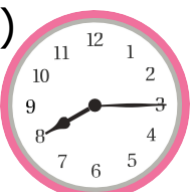


III. Match the different daily activities to the clock and the time :

Activities

Clock

Time

- | | | |
|---|---|-----------------|
| (a)  | (i)  | (I) 8:15 a.m. |
| (b)  | (ii)  | (II) 7:15 a.m. |
| (c)  | (iii)  | (III) 6:00 p.m. |
| (d)  | (iv)  | (IV) 7:05 a.m. |
| (e)  | (v)  | (V) 7:00 a.m. |
| (f)  | (vi)  | (VI) 2:30 p.m. |
| (g)  | (vii)  | (VII) 7:45 a.m. |

IV. Word problems:

Jasline had a bad morning today.

(a) Jasline usually wakes up at 7 o'clock in the morning. Today, she got up 53 minutes later than usual. What time did Jasline wake up?

(b) Since she got up late, Jasline could not take her usual train. She took the next train at twenty past eight in the morning, which was 40 minutes later than her usual train. What time is her usual train?

(c) The train ride usually takes half an hour, but there was a 25 minute delay. How many minutes was the train ride today?

(d) Jasline arrived at her office at 9:25 in the morning; her meeting with the client was scheduled at a quarter to ten in the morning. How many minutes did she have to prepare for the meeting?

(e) However, her client was 45 minutes late! At what time did the meeting start?

(f) When she got home, Jasline slept for 3 hours. How many minutes did she sleep?

V. Which unit would you choose for: { seconds, minutes, hours, days, weeks, years }

a) Blinking of eyes _____

b) Cutting a cake _____

c) Watching a cricket match _____

d) Eating food _____

e) A baby grows into an adult in _____


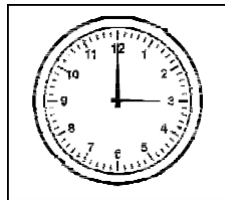
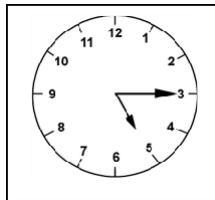
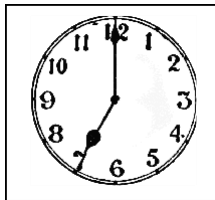
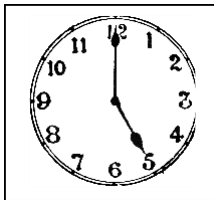
f) Making a table _____

g) To complete your homework _____

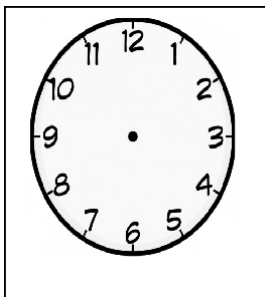
h) To wear shoes _____

i) Talking to your friend over phone _____

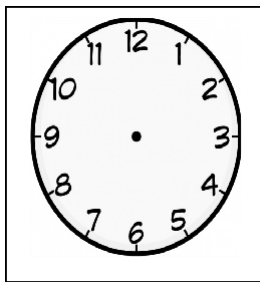
IV. See the clock face and write the time:



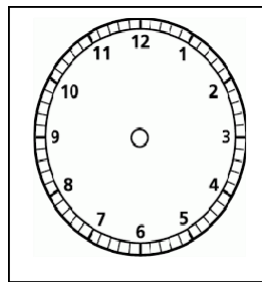
V. Draw hands for the clock faces to show the given time:



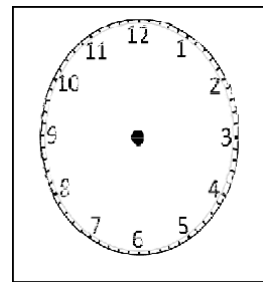
6 o' clock



12 o' clock



2.30



8 o' clock

Total number of printed pages: 4

परमाणु ऊर्जा शिक्षण संस्था, मुंबई

Atomic Energy Education Society
Session 2023 -24

Class : III

Subject :Mathematics

WORKSHEETNO-3

Name of the Chapter : TIME GOES ON

I. Fill in the blanks.

- 1) _____ days make one week.
- 2) There are ____ months in a year.
- 3) _____ is the last month of the year .
- 4) I was born in the month of _____.
- 5) _____days are there in September.
- 6) There are _____days in a leap year.
- 7) I will be in ____class in the year 2019.
- 8) One day = _____ hours.
- 9) There are _____ minutes in one hour.
- 10) Hundred Years make a_____.

II. Given below are some important dates and months of the country India. Arrange the above information in the correct sequence and find the message.

- | | | |
|---|---------------------------|----------------|
| A | 31 st December | New year eve |
| I | 1 st January | New year |
| L | 26 th January | Republic day |
| D | 14 th November | Children's day |

O	14 th April	Dr. Ambedkar jayanthi
I	5 th September	Teacher's day
N	2 nd October	Gandhi jayanthi
E	15 th August	Independence day
V	1 st May	Maharashtra day
I	25 th December	Christmas

Alphabets	Date & month	Event

III. Word problems:

On Fridays, Dr. Moore usually comes in to his clinic at 9:30 in the morning and leaves at noon.

(a) The first appointment is usually 12 minutes after Dr. Moore arrives. When is the first appointment on most Fridays?

(b) However, Dr. Moore came in at 9:50 in the morning on this Friday. How much later was Dr. Moore than his usual time?

IV. Choose the correct answer:

- 1) Which place is closer to our school? _____
a) Income tax office b) Periyar bus stand
- 2) Who takes less time? _____
a) Ramu going from Madurai to Chennai b) Somu going from Narimedu to
Thamukkam.
- 3) Who is elder? _____
a) 2 years b) 12 months
- 4) Who is the eldest person? _____
a) Neha born on 23rd March 2009 b) Shilpa born on 15th May 2014
- 5) A fortnight means _____
a) 10 days b) two week

V. Answer the following questions based on the calendar of the month of August 2021:

S	M	T	W	T	F	S
1	2	3	4	5	6	7
8	9	10	11	12	13	14
15	16	17	18	19	20	21
22	23	24	25	26	27	28
29	30	31				

(a) How many national holidays are there in August 2021? _____

(b) How many Tuesdays are there in August 2021? _____

(c) It is Thursday on 31st? (True/False) _____

(d) It is Wednesday on 11th? (True/False) _____

(e) Is it Friday on 7th? (True/False) _____

(f) Which date in the month is Independence Day? _____

VI. Answer the following questions based on the calendar of the month of April 2021:

S	M	T	W	T	F	S
				1	2	3
4	5	6	7	8	9	10
11	12	13	14	15	16	17
18	19	20	21	22	23	24
25	26	27	28	29	30	

i. How many national holidays are there in April 2021? _____

ii. How many Thursdays are there in April 2021? _____

iii. It is Tuesday on 21st?(True/False) _____

iv. It is Friday on 24th? (True/False) _____

v. Is it Friday on 23rd?(True/False) _____

vi. Which day in the month is April Fools Day? _____



